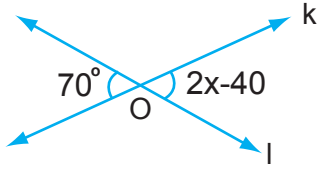


1.

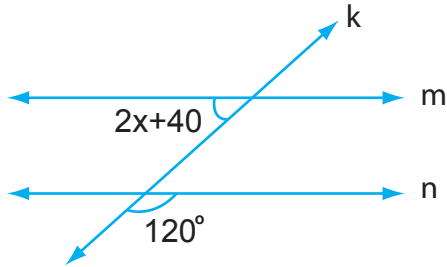


Yukarıdaki şekilde k ve l doğruları O noktasında kesişmektedir.

Verilenlere göre x kaçtır?

- A) 25 B) 35 C) 45 D) 55

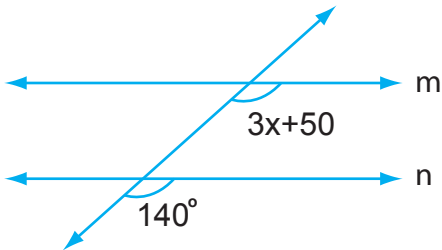
2.



Yukarıdaki şekilde m//n ise, x kaçtır?

- A) 10 B) 20 C) 30 D) 40

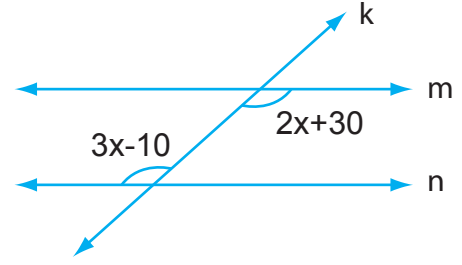
3.



Yukarıdaki şekilde m//n ise, x kaçtır?

- A) 30 B) 35 C) 40 D) 45

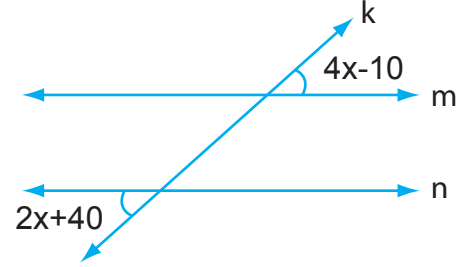
4.



Yukarıdaki şekilde m//n ise, x kaçtır?

- A) 60 B) 50 C) 40 D) 60

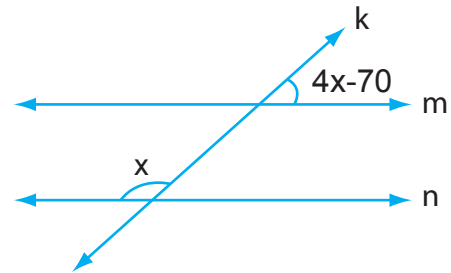
5.



Yukarıdaki şekilde m//n ise, x kaçtır?

- A) 15 B) 25 C) 35 D) 45

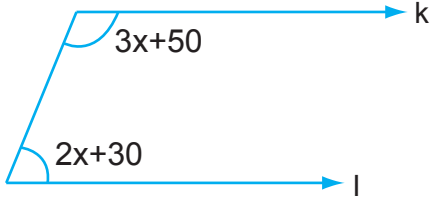
6.



Yukarıdaki şekilde m//n ise, x kaçtır?

- A) 70 B) 60 C) 50 D) 40

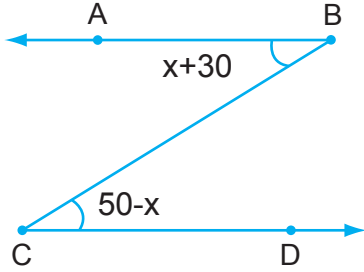
7.



Yukarıdaki şekilde $k//l$ ise, x kaçtır?

- A) 10 B) 20 C) 30 D) 40

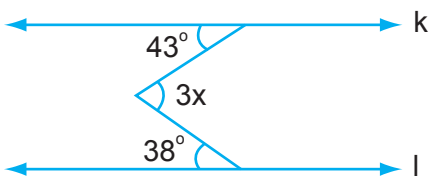
8.



Yukarıdaki şekilde $[AB]//[CD]$ ise, $\hat{s}(ABC)$ kaç derecedir?

- A) 10 B) 20 C) 30 D) 40

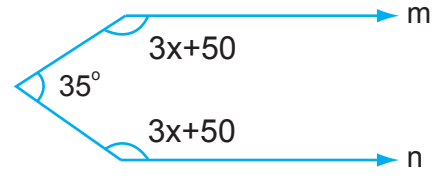
9.



Yukarıdaki şekilde $k//l$ ise, x kaçtır?

- A) 17 B) 27 C) 34 D) 42

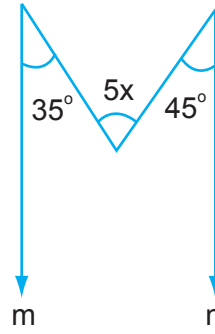
10.



Yukarıdaki şekilde $m//n$ ise, x kaçtır?

- A) 40 B) 37,5 C) 35 D) 32,5

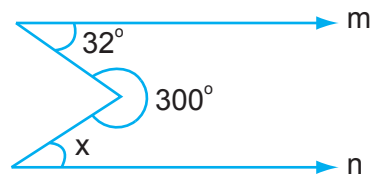
11.



Yukarıdaki şekilde $m//n$ ise, x kaçtır?

- A) 13 B) 14 C) 15 D) 16

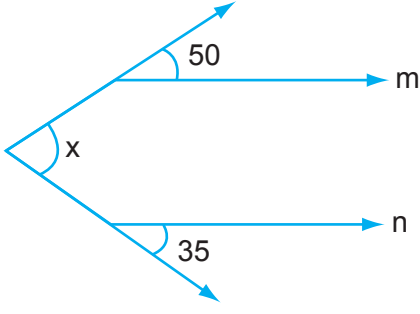
12.



Yukarıdaki şekilde $m//n$ ise, x kaçtır?

- A) 24 B) 26 C) 28 D) 32

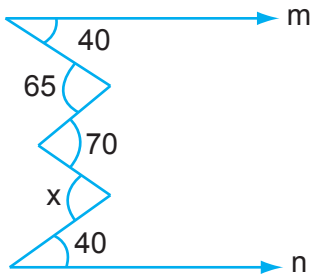
13.



Yukarıdaki şekilde $m//n$ ise, x kaçtır?

- A) 85 B) 80 C) 75 D) 70

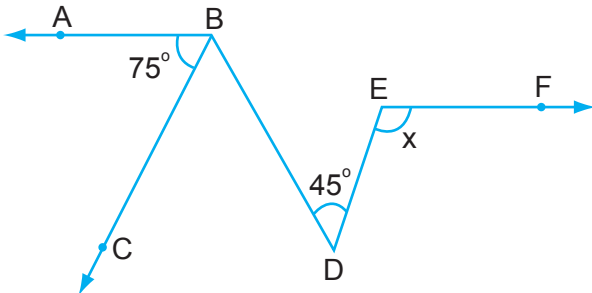
14.



Yukarıdaki şekilde $m//n$ ise, x kaçtır?

- A) 85 B) 80 C) 75 D) 70

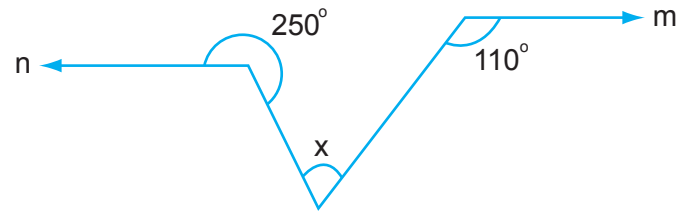
15.



Yukarıdaki şekilde $[AB]//[EF]$ ve $[BC]//[ED]$ ise, x kaçtır?

- A) 85 B) 95 C) 105 D) 110

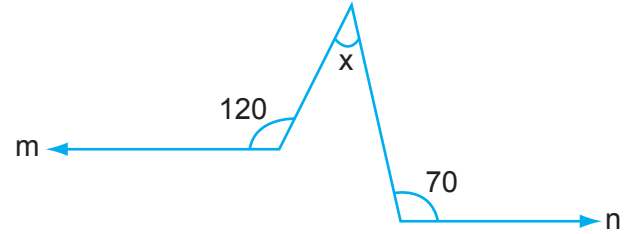
16.



Yukarıdaki şekilde $m//n$ ise, x kaçtır?

- A) 30 B) 40 C) 50 D) 60

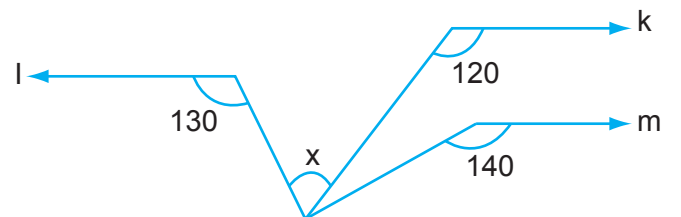
17.



Yukarıdaki şekilde $m//n$ ise, x kaçtır?

- A) 25 B) 20 C) 15 D) 10

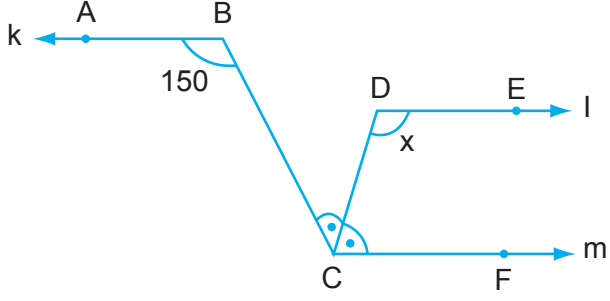
18.



Yukarıdaki şekilde $k // l // m$ ise, x kaç derecedir?

- A) 90 B) 80 C) 70 D) 60

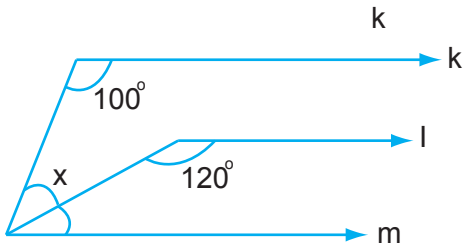
19.



Yukarıdaki şekilde [CD] açkırtay $k // l // m$ ise, x kaç derecedir?

- A) 120 B) 115 C) 110 D) 105

20.



Yukarıdaki şekilde $k // l // m$ ise, x kaç derecedir?

- A) 50 B) 40 C) 30 D) 20

AD			
NO		DERS	

A B C D

- 1
- 2
- 3
- 4
- 5
- 6
- 7
- 8
- 9
- 10

A B C D

- 11
- 12
- 13
- 14
- 15
- 16
- 17
- 18
- 19
- 20

