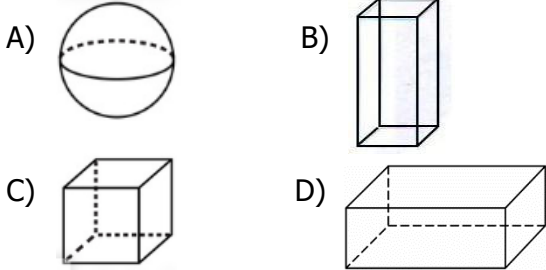


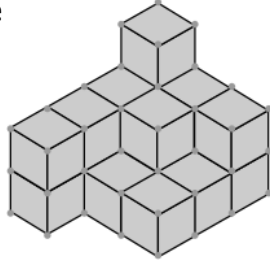
1) 6 tane kare şeklinde eş yüzüm var.

Yukarıdaki bilgi hangi geometrik cisme aittir?



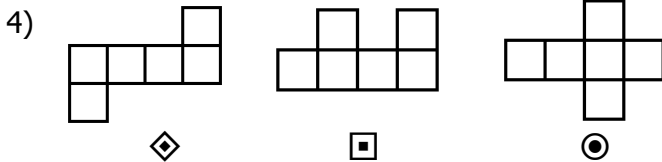
2) Yandaki yapıda kaç tane küp vardır?

- A) 17
B) 18
C) 19
D) 20




3) 3 tane küpü yana yana yapıştırırsak hangi geometrik şekli elde ederiz?

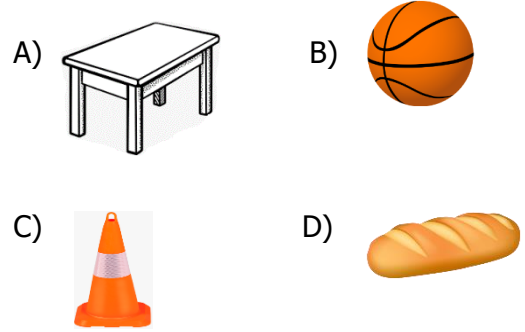
- A) üçgen prizma B) küp
C) kare prizma D) dikdörtgen prizma



Yukarıdakilerden hangileri ile bir küp oluşturulabilir?

- A)   B)  C)   D)  

5) Aşağıdakilerden hangisinde düzlem modeli bulunur ?



6) 24 tane eş kare şeklindeki yüzden kaç tane küp elde edilir?

- A) 3 B) 4 C) 5 D) 6

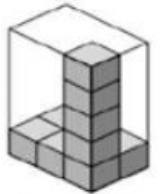
7) Yandaki yapıya kaç tane daha küp eklersek büyük bir küp elde ederiz ?

- A) 7 B) 9
C) 6 D) 8



8) Yandaki prizma küplerle tamamlanınca toplam kaç küp kullanılır?

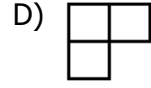
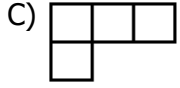
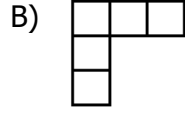
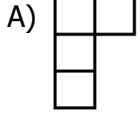
- A) 32 B) 26 C) 28 D) 30



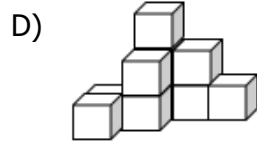
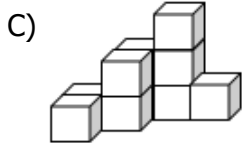
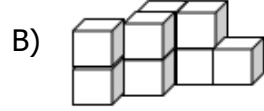
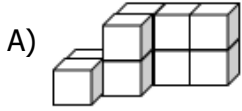
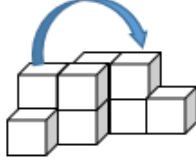
9) Aşağıdakilerden hangisinde bir düzlem modeli bulunmaz ?

- A) televizyon B) futbol sahası
C) resim kağıdı D) bisiklet tekeri

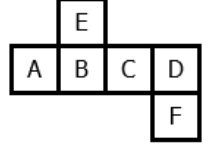
10) Yandaki yapının tepeden görünüşü aşağıdakilerden hangisidir?



11) Yandaki yapıda belirtilen küp ok işaretli yere bırakılırsa hangi yapı oluşur?



12) Yanda açılımı verilen küp birleştirilirse "C" harfinin karşısında hangi harf yer alır?



A) A

B) D

C) E

D) B