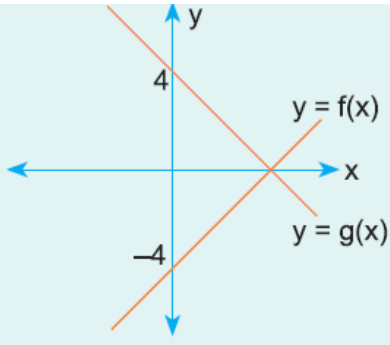


1.

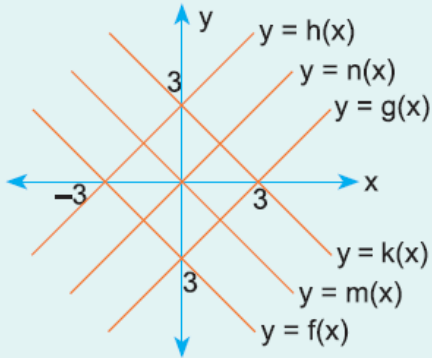


Yukarıda $f(x)$ ve $g(x)$ fonksiyonlarının grafikleri verilmiştir.

Buna göre, aşağıdaki bağıntılardan hangisi doğrudur?

- A) $f(-x) = g(x)$ B) $f(2x) = g(x)$ C) $-f(x) = g(x)$
 D) $f(x - 4) = g(x)$ E) $f(x + 4) = g(x)$

2.

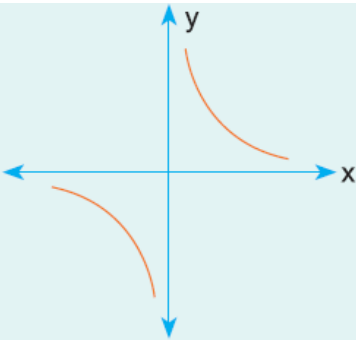


Yukarıda $y = f(x)$ fonksiyonlarının grafiği verilmiştir.

Buna göre, $y = f(-x)$ fonksiyonunun grafiği aşağıdakilerden hangisidir?

- A) $g(x)$ B) $h(x)$ C) $m(x)$ D) $n(x)$ E) Hiçbiri

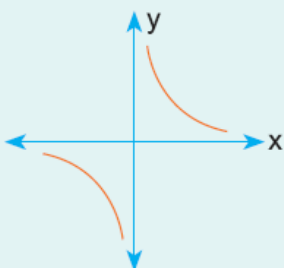
3.



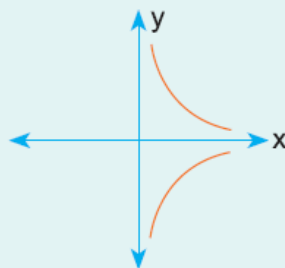
Yandaki $y = \frac{1}{x}$ in grafiği verilmiştir.

Buna göre, $y = f(-x)$ in grafiği aşağıdakilerden hangisidir?

A)



B)

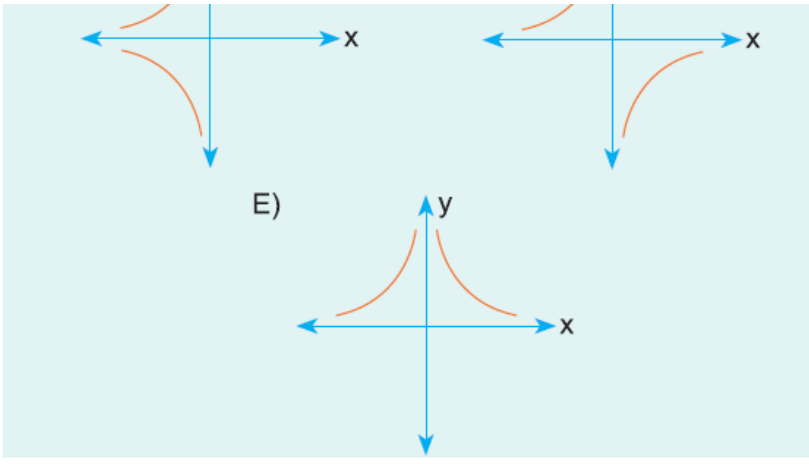


C)



D)





www.supersonu.com

Cevaplar :
1)C, 2)A, 3)D,