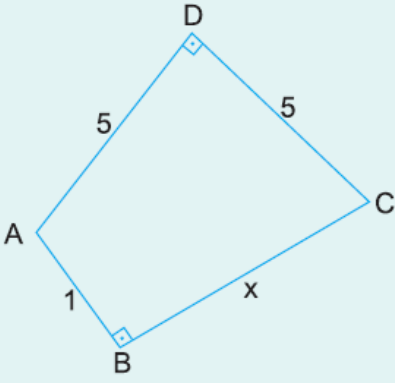


1.

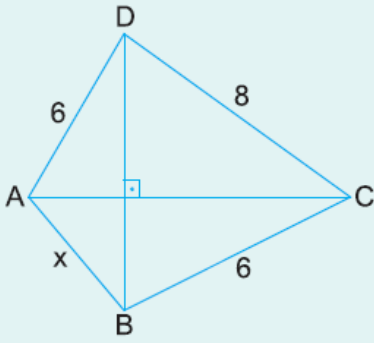


ABCD bir dörtgen
 $[AD] \perp [DC]$
 $[AB] \perp [BC]$
 $|AD| = |DC| = 5 \text{ cm}$
 $|AB| = 1 \text{ cm}$

Yukarıdaki verilere göre, $|BC| = x$ kaç cm dir?

- A) $3\sqrt{5}$ B) $4\sqrt{3}$ C) 7 D) $2\sqrt{3}$ E) 8

2.

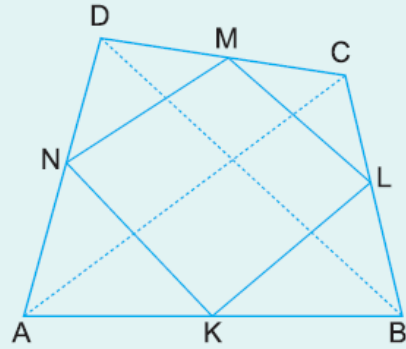


ABCD bir dörtgen
 $[AC] \perp [BD]$
 $|BC| = |AD| = 6 \text{ cm}$
 $|DC| = 8 \text{ cm}$

Yukarıdaki verilere göre, $|AB| = x$ kaç derecedir?

- A) $2\sqrt{2}$ B) 3 C) $\sqrt{10}$ D) $2\sqrt{3}$ E) 4

3.

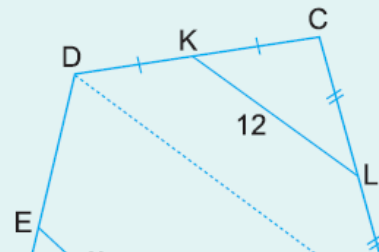


ABCD bir dörtgen
 K, L, M ve N orta noktalar
 $|AC| = 16 \text{ cm}$
 $|BD| = 18 \text{ cm}$

Yukarıdaki verilere göre, KLMN dörtgeninin çevresi kaç cm dir?

- A) 24 B) 28 C) 30 D) 34 E) 38

4.



ABCD bir dörtgen
 K ve L orta noktalar
 $|DE| = 2|AE|$
 $[EF] \parallel [KL]$
 $|KL| = 12 \text{ cm}$



Yukarıdaki verilere göre, $|EF| = x$ kaç cm dir?

- A) 6 B) 8 C) 9 D) 10 E) 12

www.supersoru.com

Cevaplar :

1)C, 2)A, 3)D, 4)B,