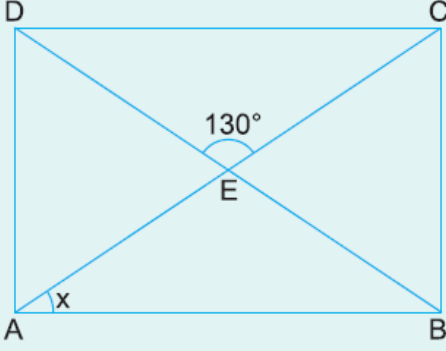
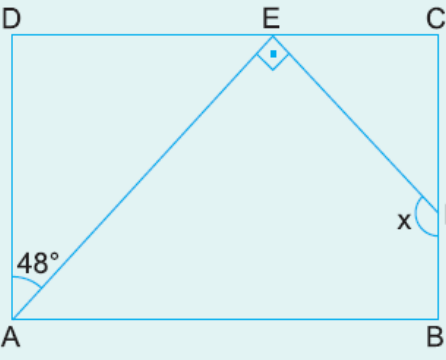


1.  ABCD bir dikdörtgen
[AC] ve [BD] köşegen
 $m(\widehat{DEC}) = 130^\circ$

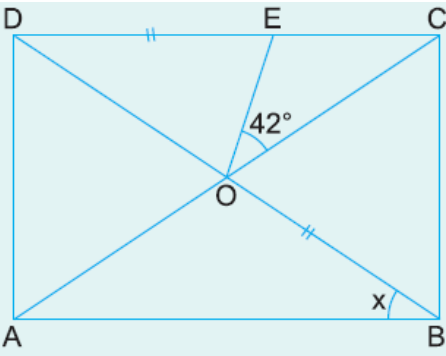
Yukarıdaki verilere göre, $m(\widehat{EAB}) = x$ kaç derecedir?

A) 20 B) 25 C) 30 D) 35 E) 40

2.  ABCD bir dikdörtgen
[AE] \perp [EF]
 $m(\widehat{DAE}) = 48^\circ$


Yukarıdaki verilere göre, $m(\widehat{EFB}) = x$ kaç derecedir?

A) 132 B) 134 C) 136 D) 138 E) 142

3.  ABCD bir dikdörtgen
[AC] ve [BD] köşegen
 $m(\widehat{EOC}) = 42^\circ$
|DE| = |OB|

Yukarıdaki verilere göre, $m(\widehat{OAB}) = x$ kaç derecedir?

A) 18 B) 22 C) 24 D) 28 E) 32

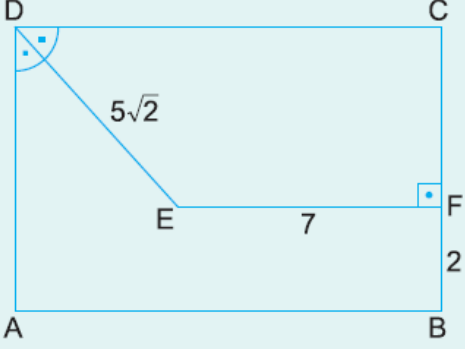
4.  ABCD dikdörtgeni beş eş dikdörtgene ayrılmıştır.
|AD| = 15 cm



olduđuna göre, Çevre(ABCD) kaç cm dir?

- A) 66 B) 72 C) 78 D) 84 E) 90

5.



ABCD bir dikdörtgen

[EF] \perp [BC]

[DE] açıortay

|DE| = $5\sqrt{2}$ cm

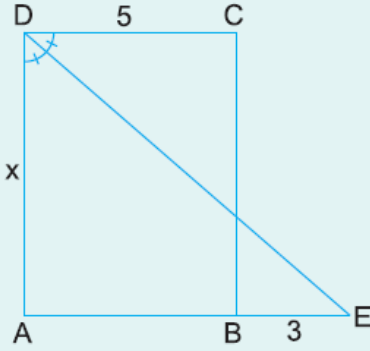
|EF| = 7 cm

|FB| = 2 cm

Yukarıdaki verilere göre, A(ABCD) kaç cm^2 dir?

- A) 91 B) 84 C) 77 D) 70 E) 63

6.



ABCD bir dikdörtgen

[ED] açıortay

|DC| = 5 cm

|BE| = 3 cm

Yukarıdaki verilere göre, |AD| = x kaç cm dir?

- A) 6 B) 7 C) 8 D) 9 E) 10

www.supersoru.com

Cevaplar :

1)B, 2)D, 3)E, 4)A, 5)C, 6)E,