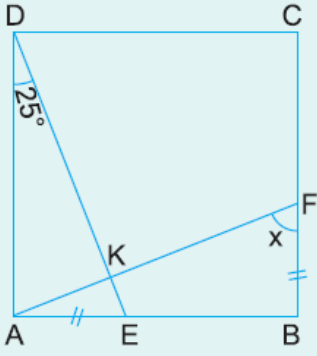


1.

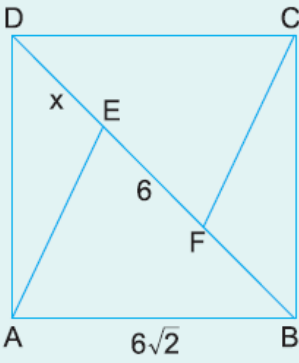


ABCD bir kare,  
 $[AF] \cap [DE] = \{K\}$   
 $|AE| = |BF|$   
 $m(\widehat{ADE}) = 25^\circ$

Yukarıdaki verilere göre,  $m(\widehat{AFB}) = x$  kaç derecedir?

- A) 55      B) 60      C) 65      D) 70      E) 75

2.

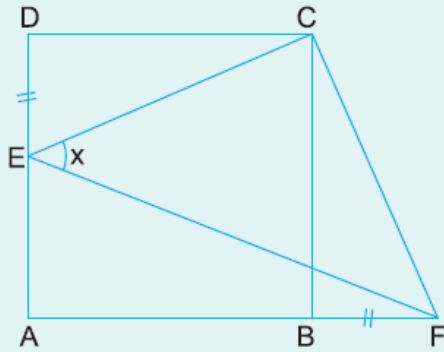


ABCD bir kare  
 $[BD]$  köşegen  
 $[AE] \parallel [CF]$   
 $|EF| = 6$  cm  
 $|AB| = 6\sqrt{2}$  cm

Yukarıdaki verilere göre,  $|DE| = x$  kaç cm dir?

- A) 3,5      B) 3      C) 2,5      D) 2      E) 1,5

3.

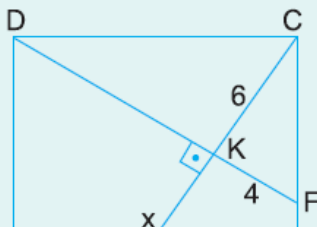


ABCD bir kare  
 $|DE| = |BF|$   
 $m(\widehat{CEF}) = x$

Yukarıdaki verilere göre,  $x$  kaç derecedir?

- A) 30      B) 40      C) 45      D) 50      E) 60

4.



ABCD bir kare  
 $[DF] \perp [CE]$   
 $|CK| = 6$  cm  
 $|KF| = 4$  cm



Yukarıdaki verilere göre,  $|EK| = x$  kaç cm dir?

- A) 7      B) 8      C) 9      D) 10      E) 11

[www.supersonu.com](http://www.supersonu.com)

Cevaplar :

1)C, 2)B, 3)C, 4)A,