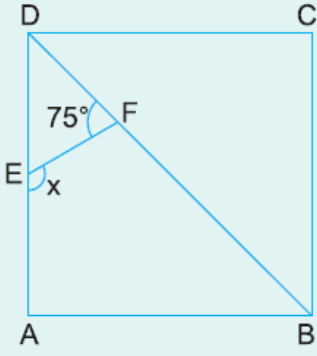


1.

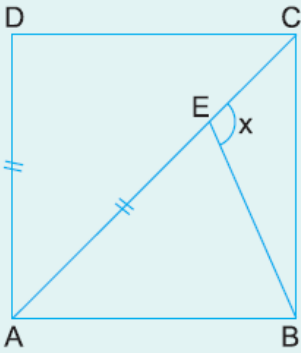


ABCD bir kare
 [BD] köşegen
 $m(\widehat{DFE}) = 75^\circ$
 $m(\widehat{AEF}) = x$

Yukarıdaki verilere göre, x kaç derecedir?

- A) 100 B) 110 C) 120 D) 130 E) 135

2.

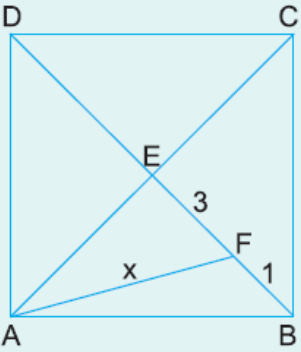


ABCD bir kare
 [AC] köşegen
 $|AD| = |AE|$
 $m(\widehat{CEB}) = x$

Yukarıdaki verilere göre, x kaç derecedir?

- A) 105 B) 107,5 C) 110 D) 112,5 E) 115

3.




ABCD bir kare
 $[AC] \perp [BD]$ köşegen
 $|EF| = 3 \text{ cm}$
 $|FB| = 1 \text{ cm}$

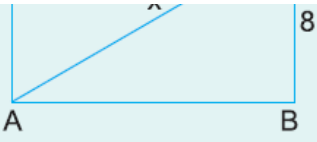
Yukarıdaki verilere göre, $|AF| = x$ kaç cm dir?

- A) 4 B) 5 C) $3\sqrt{2}$ D) $4\sqrt{2}$ E) $3\sqrt{5}$

4.



ABCD bir kare
 $|CE| = 7 \text{ cm}$
 $|EB| = 8 \text{ cm}$



Yukarıdaki verilere göre, $|AE| = x$ kaç cm dir?

- A) 13 B) 15 C) 17 D) 20 E) 24

www.supersoru.com

Cevaplar :
1)C, 2)D, 3)B, 4)C,