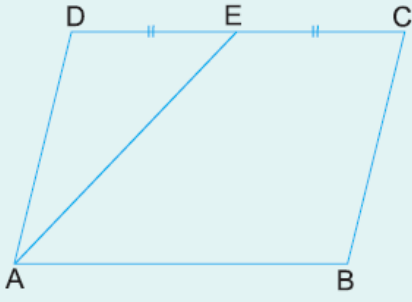


1.



ABCD bir paralelkenar

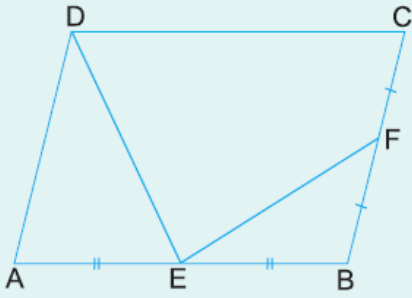
$$|DE| = |EC|$$

$$A(ABCE) = 24 \text{ cm}^2$$

Yukarıdaki verilere göre, $A(ABCD)$ kaç cm^2 dir?

- A) 28 B) 32 C) 36 D) 40 E) 44

2.



ABCD bir paralelkenar

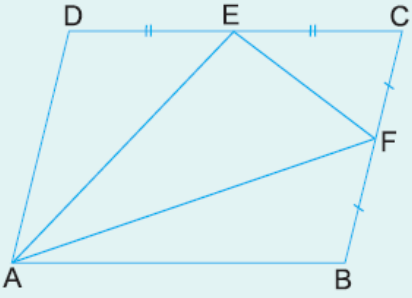
$$|AE| = |EB|$$

$$|CF| = |FB|$$

Yukarıdaki şekilde $A(DEFB) = 40 \text{ cm}^2$ olduğuna göre, $A(ABCD)$ kaç cm^2 dir?

- A) 56 B) 60 C) 64 D) 72 E) 80

3.



ABCD bir paralelkenar

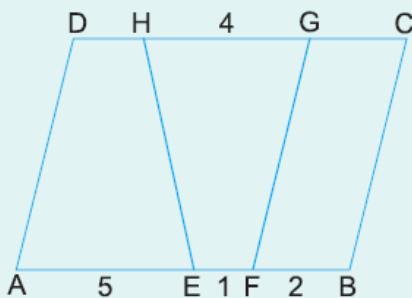
$$|DE| = |EC|$$

$$|CF| = |FB|$$

Yukarıdaki verilere göre, $\frac{A(\widehat{EAF})}{A(ABCD)}$ oranı kaçtır?

- A) $\frac{3}{8}$ B) $\frac{5}{16}$ C) $\frac{9}{32}$ D) $\frac{1}{4}$ E) $\frac{3}{16}$

4.



ABCD bir paralelkenar

$$|AE| = 5 \text{ cm}$$

$$|EF| = 1 \text{ cm}$$

$$|FB| = 2 \text{ cm}$$

$$|HG| = 4 \text{ cm}$$

A 5 E 1 F 2 B

Yukarıdaki verilere göre, $\frac{A(HEFG)}{A(ABCD)}$ oranı kaçtır?

A) $\frac{7}{16}$

B) $\frac{3}{8}$

C) $\frac{11}{32}$

D) $\frac{5}{16}$

E) $\frac{1}{4}$

www.supersoru.com

Cevaplar :

1)B, 2)C, 3)A, 4)D,