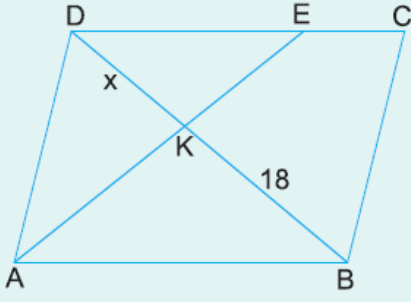


1.

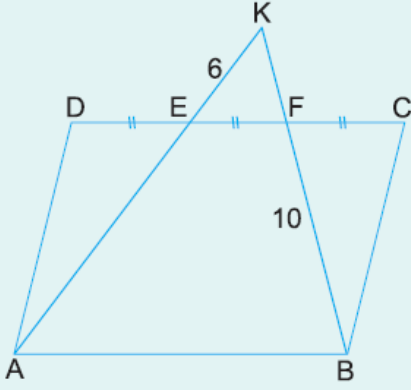


ABCD bir paralelkenar
 $|DE| = 2|EC|$
 $|BK| = 18$ cm

Yukarıdaki verilere göre, $|DK| = x$ kaç cm dir?

- A) 8 B) 9 C) 10 D) 12 E) 15

2.

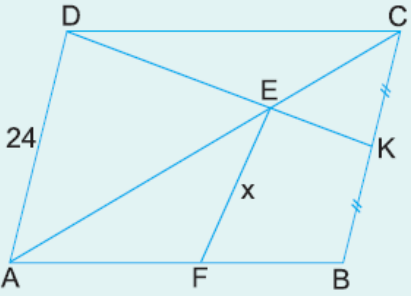


ABCD bir paralelkenar
 $|DE| = |EF| = |FC|$
 $|EK| = 6$ cm
 $|FB| = 10$ cm

Yukarıdaki verilere göre, $|AE| + |KF|$ toplamı kaç cm dir?

- A) 13 B) 14 C) 15 D) 16 E) 17

3.

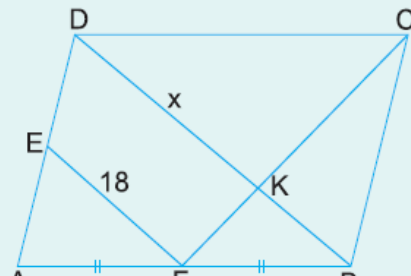


ABCD bir paralelkenar
 $|CK| = |KB|$
 $|AD| = 24$ cm

Yukarıdaki şekilde $[EF] \parallel [CB]$ olduğuna göre, $|EF| = x$ kaç cm dir?

- A) 15 B) 16 C) 17 D) 18 E) 19

4.



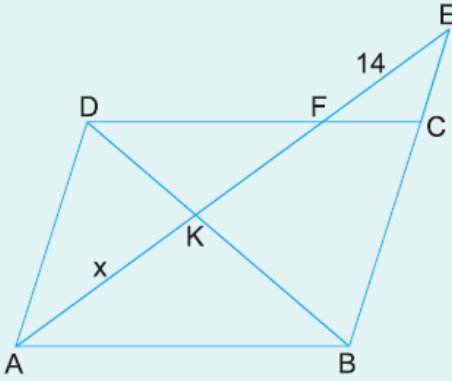
ABCD bir paralelkenar
 $|AF| = |FB|$
 $[EF] \parallel [DB]$
 $|EF| = 18$ cm

A F B

Yukarıdaki verilere göre, $|DK| = x$ kaç cm dir?

- A) 18 B) 21 C) 24 D) 27 E) 30

5.



ABCD bir paralelkenar

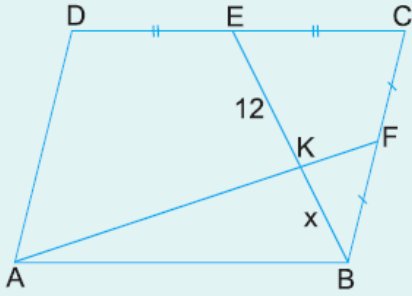
$$|BC| = 3|EC|$$

$$|EF| = 14 \text{ cm}$$

Yukarıdaki verilere göre, $|AK| = x$ kaç cm dir?

- A) 24 B) 21 C) 20 D) 18 E) 16

6.



ABCD bir paralelkenar

$$|DE| = |EC|$$

$$|CF| = |FB|$$

$$|EK| = 12 \text{ cm}$$

Yukarıdaki verilere göre, $|KB| = x$ kaç cm dir?

- A) 5 B) 6 C) 7 D) 8 E) 9

www.supersoru.com

Cevaplar :

1)D, 2)E, 3)B, 4)C, 5)A, 6)D,