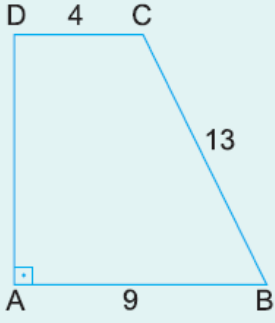


1.

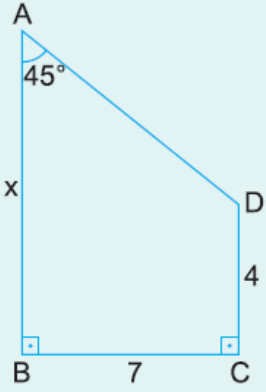


ABCD bir dik yamuk
 $[DA] \perp [AB]$
 $|DC| = 4 \text{ cm}$
 $|AB| = 9 \text{ cm}$
 $|BC| = 13 \text{ cm}$

Yukarıdaki verilere göre, $A(ABCD)$ kaç cm^2 dir?

- A) 52 B) 60 C) 66 D) 72 E) 78

2.

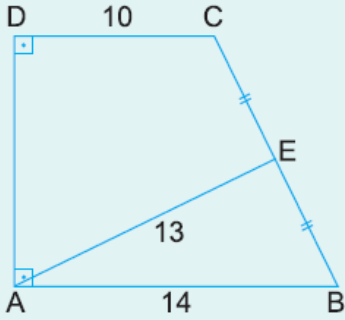


ABCD bir dik yamuk
 $m(\widehat{BAD}) = 45^\circ$
 $[AB] \perp [BC]$
 $|BC| = 7 \text{ cm}$
 $|DC| = 4 \text{ cm}$

Yukarıdaki verilere göre, $|AB| = x$ kaç cm dir?

- A) 9 B) 10 C) 11 D) 12 E) 13

3.

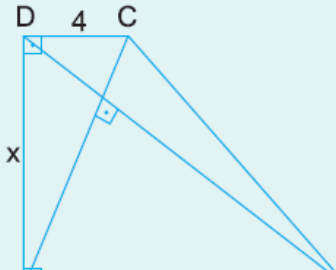


ABCD bir dik yamuk
 $[DA] \perp [AB]$
 $|CE| = |EB|$
 $|DC| = 10 \text{ cm}$
 $|AB| = 14 \text{ cm}$
 $|AE| = 13 \text{ cm}$

Yukarıdaki verilere göre, $A(ABCD)$ kaç cm^2 dir?

- A) 80 B) 96 C) 108 D) 120 E) 132

4.



ABCD bir dik yamuk
 $[DA] \perp [AB]$
 $[AC] \perp [BD]$
 $|DC| = 4 \text{ cm}$
 $|AB| = 12 \text{ cm}$



Yukarıdaki verilere göre, $|AD| = x$ kaç cm dir?

- A) 6 B) $4\sqrt{3}$ C) $3\sqrt{6}$ D) $2\sqrt{15}$ E) 8

www.supersoru.com

Cevaplar :

1)E, 2)C, 3)D, 4)B,