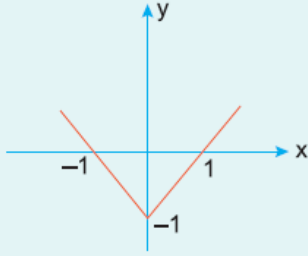


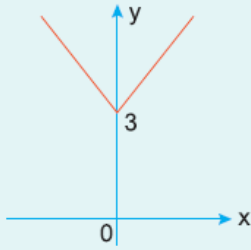
1.



Şekilde grafiği verilen fonksiyon aşağıdakilerden hangisidir?

- A)  $y = |x + 1|$       B)  $y = |x - 1|$       C)  $y = |x| + 1$   
 D)  $y = |x| - 1$       E)  $y = |2x + 2|$

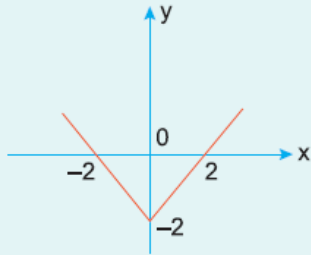
2.



Şekilde grafiği verilen fonksiyon aşağıdakilerden hangisidir?

- A)  $y = 3 + |x|$       B)  $y = |x - 3|$       C)  $y = |x| - 3$   
 D)  $y = |x + 3|$       E)  $y = 3 + |x - 3|$

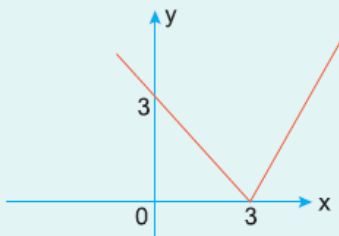
3.



Şekilde grafiği verilen fonksiyon aşağıdakilerden hangisidir?

- A)  $y = |x - 2|$       B)  $y = |x + 2|$       C)  $y = |x| - 2$   
 D)  $y = |x| + 2$       E)  $y = |2x + 4|$

4.



**Şekilde grafiđi verilen fonksiyon ařađıdakilerden hangisidir?**

- A)  $y = |x - 3|$       B)  $y = 2|x - 3|$       C)  $y = |x + 3|$   
D)  $y = 3|x|$       E)  $y = |3x - 3|$

[www.supersoru.com](http://www.supersoru.com)

Cevaplar :

1)D, 2)A, 3)C, 4)A,