




1) Seçeneklerden hangisi simetrik değildir?



Yukarıda verilen şekillerden kaç tanesi simetriktir?

A) 1

B) 2

C) 3

3) Aşağıdaki harflerden hangisi si-

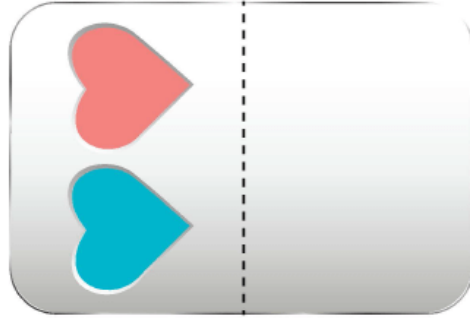
metrik **değildir**?

A) **V**


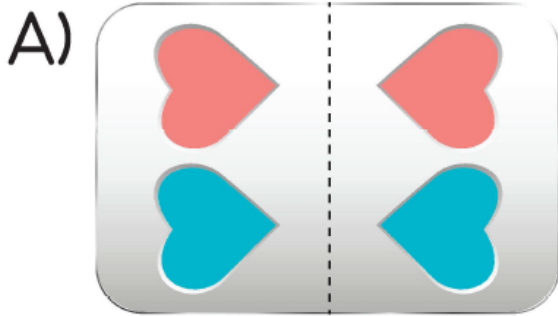
B) **A**

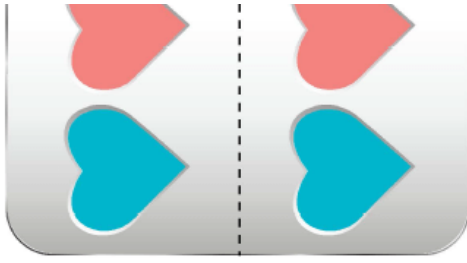
C) **Z**

4)

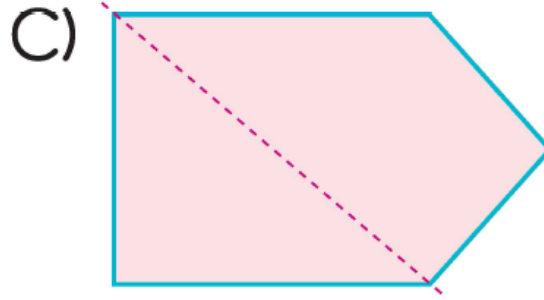
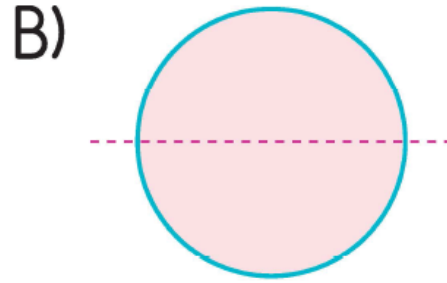
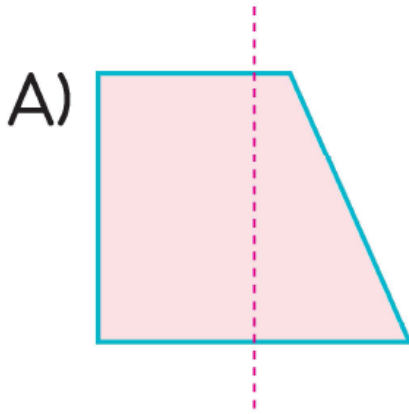


Yukarıdaki kalpleri boyayıp, kağıdı noktalı yerden ikiye katladığımızda aşağıdaki şekillerden hangisi ortaya çıkar?





5) Aşağıdaki şekillerin hangisinde kırmızı çizgilerin ayırdığı parçalar eşittir?



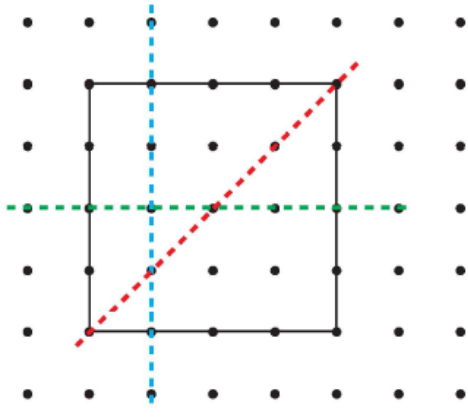
6) Aşağıdaki rakamlardan hangisi simetriktir?

A) 8

B) 4

C) 5

7)



Yandaki noktali kağıtta verilen şekli hangi renk kesikli çizgi iki eş parçaya ayırmaz?

A) Kırmızı

B) Mavi

C) Yeşil

www.supersoru.com

Cevaplar :

1)A, 2)B, 3)C, 4)A, 5)B, 6)A, 7)B,