


1) Yandaki kpn ka
kşesi grnmekte-
dir?



A) 7

B) 8

C) 9

2) Aşğıdaki grsellerden hangisinin
kşesi **yoktur**?

A)



B)



C)



2)





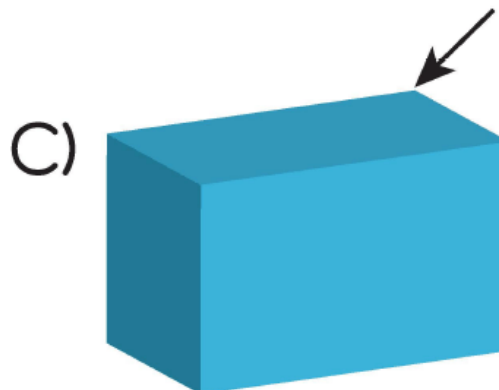
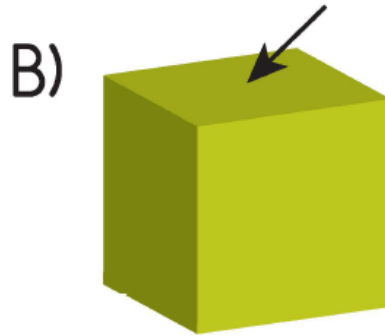
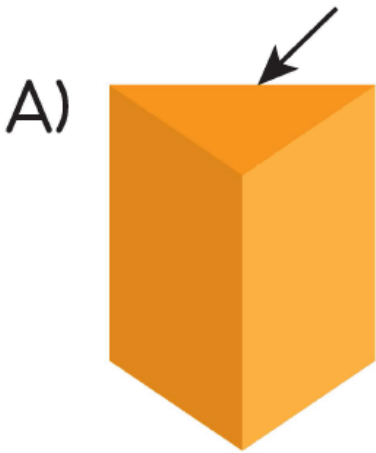
Yukarıdakilerden kaç tanesinin ayırıtı **yoktur**?

A) 3

B) 2

C) 1

4) Aşağıdaki cisimlerin hangisinde okla gösterilen yerin ismi yüzeydir?



5) Yandaki geometrik cisme benzeyen geometrik cisim hangi seçenekte verilmiştir?



A)




B)



C)



6)



Yukarıdaki geometrik cisimlerden hangilerinin ayrit ve köşesi **yoktur**?

A) 1 - 2 - 3

B) 3 - 4 - 5

C) 1 - 3 - 6

www.supersoru.com

Cevaplar :

1)A, 2)A, 3)C, 4)B, 5)B, 6)A,