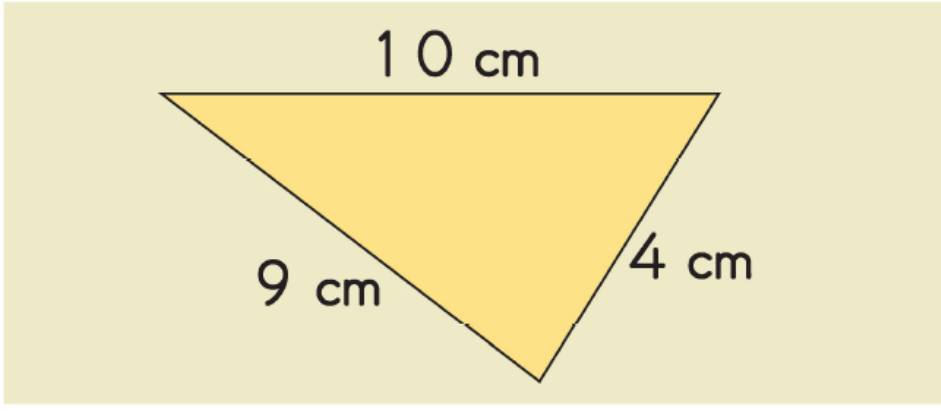


1)



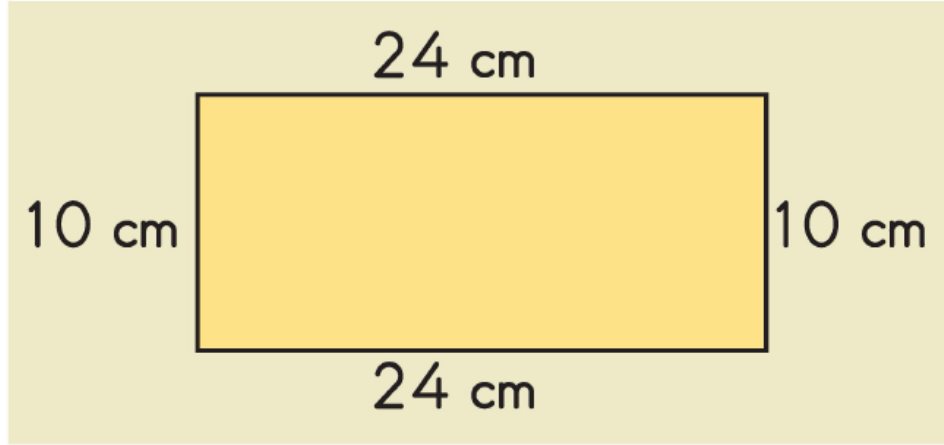
Yukarıda verilen üçgenin çevre uzunluğu kaç santimetredir?

A) 22

B) 23

C) 24

2)



Yukarıda verilen şeklin çevre uzunluğu kaç santimetredir?

A) 58

B) 62

C) 68

3)

Kırmızı çizgiyle belirlenmiş çevre uzunluğu **en kısa** olan nesne hangisidir?



4)



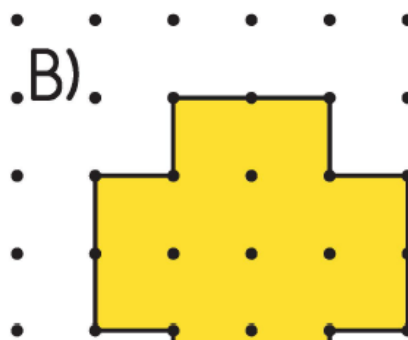
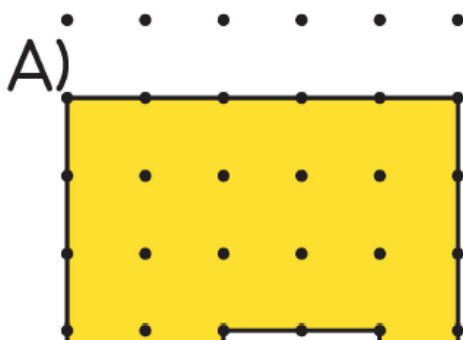
Yukarıda verilen kare şeklindeki resmin çevre uzunluğu kaç santimetredir?

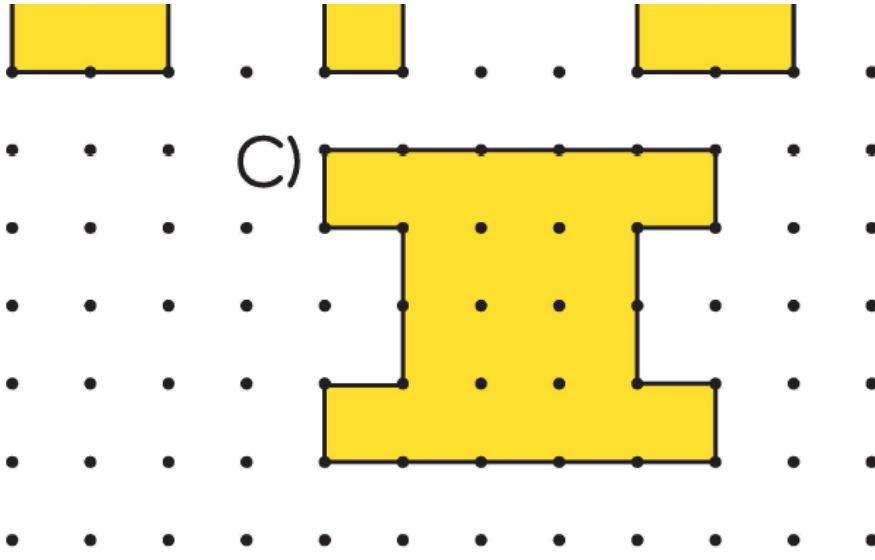
A) 72

B) 66

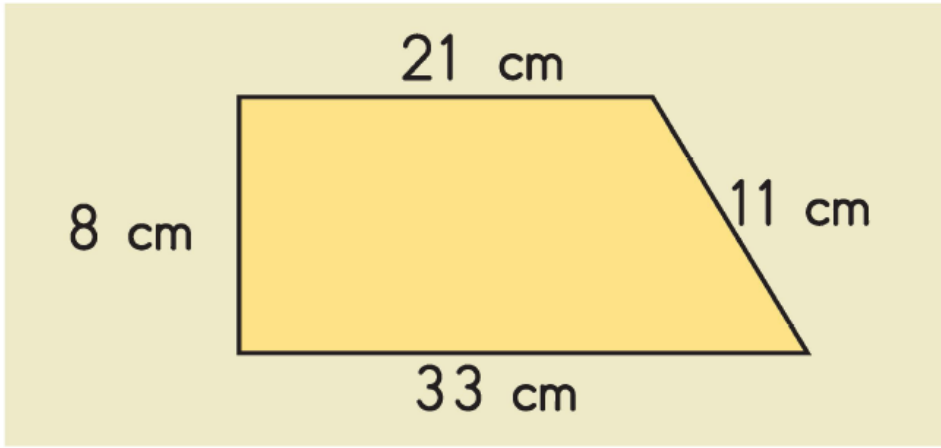
C) 60

5) Aşağıdaki noktalı kağıt üzerinde verilen şekillerden hangisinin çevre uzunluğu **daha fazladır**?





6)



Yukarıdaki şeklin çevre uzunluğu kaç santimetredir?

A) 71

B) 72

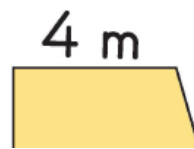
C) 73

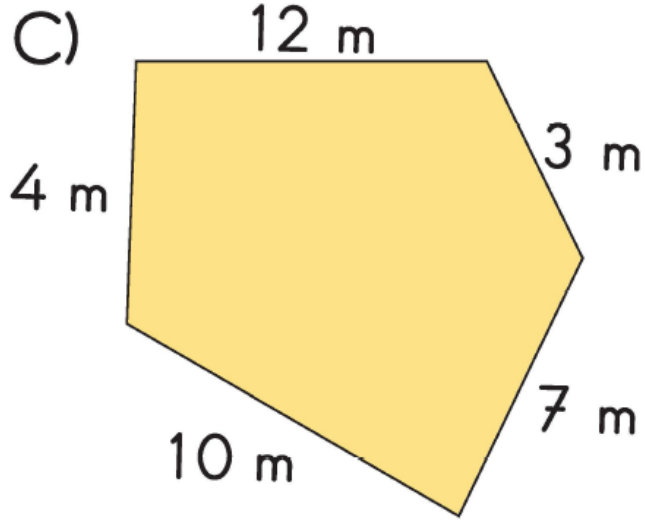
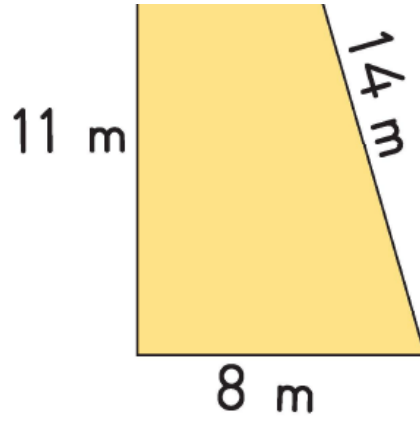
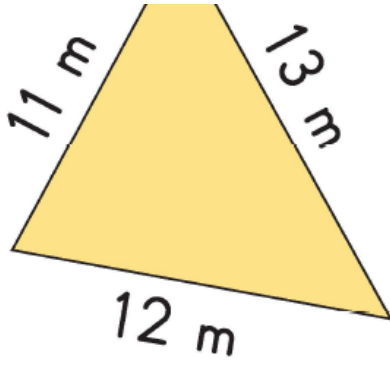
7) Kenar uzunlukları verilen aşağıdaki şekillerden hangisinin çevre uzunluğu 37 metredir?

A)



B)





www.supersoru.com

Cevaplar :

1)B, 2)C, 3)B, 4)A, 5)C, 6)C, 7)B,