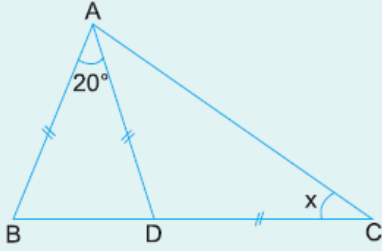


1.

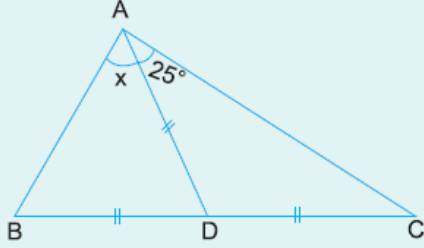


ABC bir üçgen
 $|AB| = |AD| = |DC|$
 $m(\widehat{BAD}) = 20^\circ$

Yukarıdaki verilere göre, $m(\widehat{ACB}) = x$ kaç derecedir?

- A) 20 B) 30 C) 40 D) 50 E) 60

2.

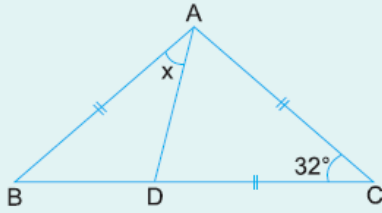


ABC bir üçgen
 $|AD| = |BD| = |DC|$
 $m(\widehat{DAC}) = 25^\circ$

Yukarıdaki verilere göre, $m(\widehat{BAD}) = x$ kaç derecedir?

- A) 50 B) 55 C) 60 D) 65 E) 70

3.

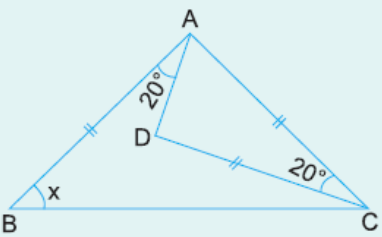


ABC bir üçgen
 $|AB| = |AC| = |DC|$
 $m(\widehat{ACB}) = 32^\circ$

Yukarıdaki verilere göre, $m(\widehat{BAD}) = x$ kaç derecedir?

- A) 38 B) 42 C) 44 D) 46 E) 48

4.



ABC bir üçgen
 $|AB| = |AC| = |DC|$
 $m(\widehat{BAD}) = 20^\circ$
 $m(\widehat{ACD}) = 20^\circ$

Yukarıdaki verilere göre, $m(\widehat{ABC}) = x$ kaç derecedir?

- A) 20 B) 25 C) 30 D) 35 E) 40

5.



ABC bir üçgen
 $|AD| = |DB|$
 $|DC| = |BC|$

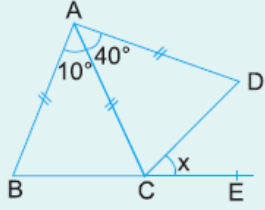


$$m(\widehat{ACB}) = 24^\circ$$

Yukarıdaki verilere göre, $m(\widehat{DBA}) = x$ kaç derecedir?

- A) 39 B) 42 C) 43 D) 45 E) 48

6.



ABC ve ACD birer
üçgen
 $m(\widehat{BAC}) = 10^\circ$
 $m(\widehat{CAD}) = 40^\circ$
 $|AB| = |AC| = |AD|$

Yukarıdaki verilere göre, $m(\widehat{DCE}) = x$ kaç derecedir?

- A) 25 B) 30 C) 35 D) 40 E) 50

www.supersoru.com

Cevaplar :

1)C, 2)D, 3)B, 4)E, 5)A, 6)A,