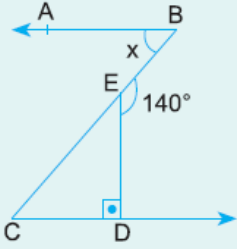


1.

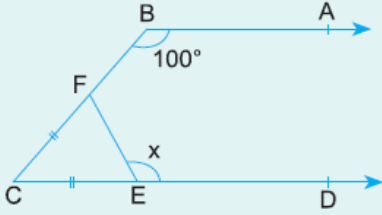


[BA // [CD
 [ED] \perp [CD
 $m(\widehat{BED}) = 140^\circ$

Yukarıdaki verilere göre, $m(\widehat{ABC}) = x$ kaç derecedir?

- A) 50 B) 45 C) 40 D) 35 E) 30

2.

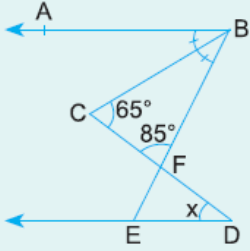


[BA // [CD
 $m(\widehat{CBA}) = 100^\circ$
 $|CF| = |CE|$

Yukarıdaki verilere göre, $m(\widehat{FED}) = x$ kaç derecedir?

- A) 110 B) 115 C) 120 D) 125 E) 130

3.

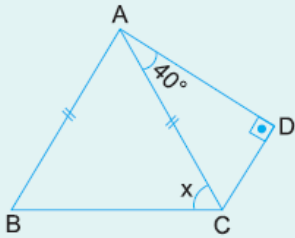


[BA // [DE
 $m(\widehat{ABC}) = m(\widehat{CBE})$
 $m(\widehat{BCD}) = 65^\circ$
 $m(\widehat{CFB}) = 85^\circ$

Yukarıdaki verilere göre, $m(\widehat{CDE}) = x$ kaç derecedir?

- A) 25 B) 30 C) 35 D) 40 E) 45

4.



ABC bir üçgen
 [AB] // [DC]
 [AD] \perp [DC]
 $m(\widehat{CAD}) = 40^\circ$
 $|AB| = |AC|$


Yukarıdaki verilere göre, $m(\widehat{ACB}) = x$ kaç derecedir?

- A) 55 B) 60 C) 65 D) 70 E) 75

5.



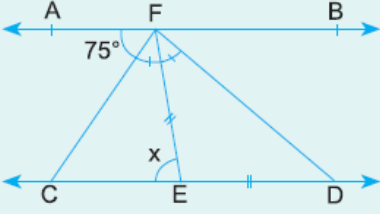
[BA // [CD
 [BE] ve [CE] açıortay
 $m(\widehat{BEC}) = x$



Yukarıdaki verilere göre, x kaç derecedir?

- A) 60 B) 70 C) 75 D) 80 E) 90

6.



$AB \parallel CD$
 $m(\widehat{CFE}) = m(\widehat{EFD})$
 $m(\widehat{AFC}) = 75^\circ$
 $|FE| = |ED|$

Yukarıdaki verilere göre, $m(\widehat{FEC}) = x$ kaç derecedir?

- A) 50 B) 55 C) 60 D) 70 E) 75

www.supersoru.com

Cevaplar :

1)A, 2)E, 3)C, 4)C, 5)E, 6)D,